


# Measurement Tools: Lesson I

Choose the best tool for measuring the real object by drawing a shape around the picture.

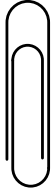


= use a ruler



= use a yardstick or meterstick


1.




4.



2.



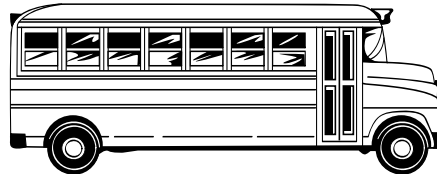
5.



3.



6.



Name \_\_\_\_\_

Date \_\_\_\_\_


# Measurement Tools: Lesson 2

Measure to the nearest inch. Measure in the direction of the arrow.


This material is provided solely for individual educational use by licensed users only and may not be further reproduced or distributed.



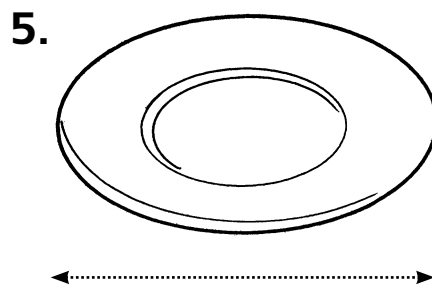
Measure: \_\_\_\_\_



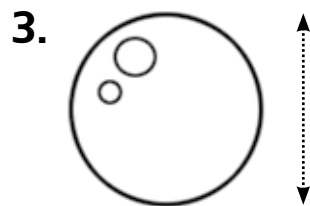
Measure: \_\_\_\_\_




Measure: \_\_\_\_\_



Measure: \_\_\_\_\_



Measure: \_\_\_\_\_

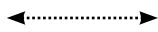


Measure: \_\_\_\_\_


Copyright © McGraw Hill. Permission is granted to reproduce for classroom use.

# Measurement Tools: Lesson 3

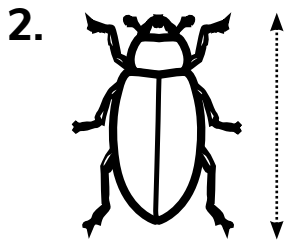
Measure to the nearest centimeter. Measure in the direction of the arrow.




Measure: \_\_\_\_\_




Measure: \_\_\_\_\_



Measure: \_\_\_\_\_



Measure: \_\_\_\_\_



Measure: \_\_\_\_\_



Measure: \_\_\_\_\_

Name \_\_\_\_\_

Date \_\_\_\_\_

# Measurement Tools: Lesson 4

Circle the unit you would use to measure the length of the real object.



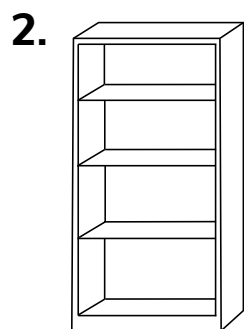
whale

inch foot yard




toothpaste

meter centimeter




bookcase

inch yard centimeter



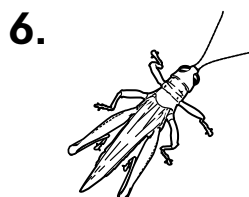
school bus

centimeter meter



book

centimeter meter



grasshopper

inch foot yard

This material is provided solely for individual educational use by licensed users only and may not be further reproduced or distributed.

Copyright © McGraw Hill. Permission is granted to reproduce for classroom use.